

Writing Equations of Circles

Date _____ Period _____

Use the information provided to write the standard form equation of each circle.

1) $8x + x^2 - 2y = 64 - y^2$

2) $137 + 6y = -y^2 - x^2 - 24x$

3) $x^2 + y^2 + 14x - 12y + 4 = 0$

4) $y^2 + 2x + x^2 = 24y - 120$

5) $x^2 + 2x + y^2 = 55 + 10y$

6) $8x + 32y + y^2 = -263 - x^2$

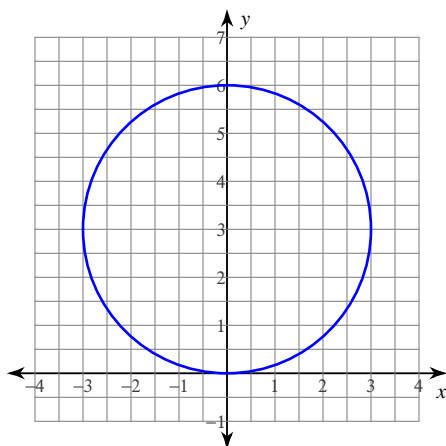
7) Center: $(-11, -8)$
Radius: 4

8) Center: $(-6, -15)$
Radius: $\sqrt{5}$

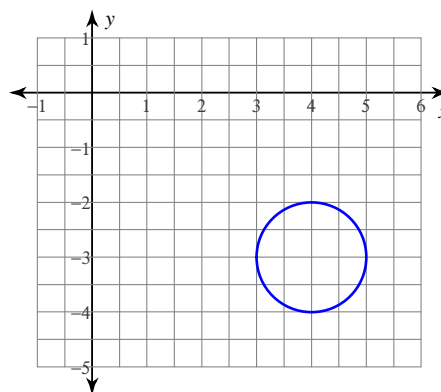
9) $(x - 16)^2 + (y - 6)^2 = 1$
Translated 4 left, 2 up

10) $(x + 5)^2 + (y + 7)^2 = 36$
Translated 5 left, 4 down

11)



12)



13) Ends of a diameter: $(-17, -9)$ and $(-19, -9)$

14) Ends of a diameter: $(-3, 11)$ and $(3, -13)$

15) Center: $(-15, 3\sqrt{7})$
Area: 2π

16) Center: $(-11, -14)$
Area: 16π

17) Center: $(-5, 12)$
Circumference: 8π

18) Center: $(15, 14)$
Circumference: $2\pi\sqrt{15}$

19) Center: $(2, -5)$
Point on Circle: $(-7, -1)$

20) Center: $(14, 17)$
Point on Circle: $(15, 17)$

21) Center: $(-15, 9)$
Tangent to $x = -17$

22) Center: $(-2, 12)$
Tangent to $x = -5$

23) Center lies on the x-axis
Tangent to $x = 7$ and $x = -13$

24) Center lies in the fourth quadrant
Tangent to $x = 7$, $y = -4$, and $x = 17$

25) Three points on the circle:
 $(-18, -5)$, $(-7, -16)$, and $(4, -5)$

26) Three points on the circle:
 $(-7, 6)$, $(9, 6)$, and $(-4, 13)$

27) $x^2 + y^2 + 14x + 12y + 76 = 0$
Translated 2 right, 4 down

28) $x^2 + y^2 - 10x + 20y + 61 = 0$
Translated 1 left, 2 down

29) $x^2 + y^2 + 14x - 8y + 29 = 0$
Translated 3 right, 4 down

30) $4y + y^2 = -28x - x^2 - 191$
Translated 4 right

Writing Equations of Circles

Date _____ Period _____

Use the information provided to write the standard form equation of each circle.

1) $8x + x^2 - 2y = 64 - y^2$

$$(x + 4)^2 + (y - 1)^2 = 81$$

2) $137 + 6y = -y^2 - x^2 - 24x$

$$(x + 12)^2 + (y + 3)^2 = 16$$

3) $x^2 + y^2 + 14x - 12y + 4 = 0$

$$(x + 7)^2 + (y - 6)^2 = 81$$

4) $y^2 + 2x + x^2 = 24y - 120$

$$(x + 1)^2 + (y - 12)^2 = 25$$

5) $x^2 + 2x + y^2 = 55 + 10y$

$$(x + 1)^2 + (y - 5)^2 = 81$$

6) $8x + 32y + y^2 = -263 - x^2$

$$(x + 4)^2 + (y + 16)^2 = 9$$

7) Center: $(-11, -8)$

Radius: 4

$$(x + 11)^2 + (y + 8)^2 = 16$$

8) Center: $(-6, -15)$

Radius: $\sqrt{5}$

$$(x + 6)^2 + (y + 15)^2 = 5$$

9) $(x - 16)^2 + (y - 6)^2 = 1$

Translated 4 left, 2 up

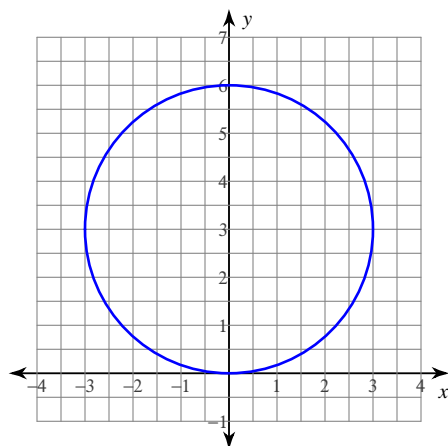
$$(x - 12)^2 + (y - 8)^2 = 1$$

10) $(x + 5)^2 + (y + 7)^2 = 36$

Translated 5 left, 4 down

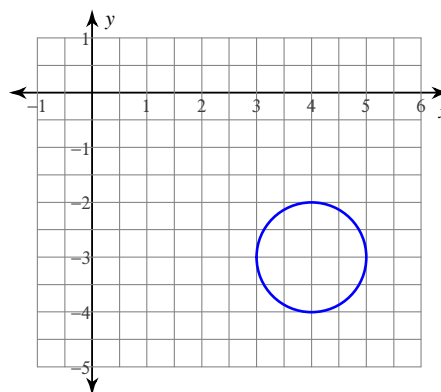
$$(x + 10)^2 + (y + 11)^2 = 36$$

11)



$$x^2 + (y - 3)^2 = 9$$

12)



$$(x - 4)^2 + (y + 3)^2 = 1$$

13) Ends of a diameter: $(-17, -9)$ and $(-19, -9)$

$$(x + 18)^2 + (y + 9)^2 = 1$$

15) Center: $(-15, 3\sqrt{7})$

Area: 2π

$$(x + 15)^2 + (y - 3\sqrt{7})^2 = 2$$

17) Center: $(-5, 12)$

Circumference: 8π

$$(x + 5)^2 + (y - 12)^2 = 16$$

19) Center: $(2, -5)$

Point on Circle: $(-7, -1)$

$$(x - 2)^2 + (y + 5)^2 = 97$$

21) Center: $(-15, 9)$

Tangent to $x = -17$

$$(x + 15)^2 + (y - 9)^2 = 4$$

23) Center lies on the x-axis

Tangent to $x = 7$ and $x = -13$

$$(x + 3)^2 + y^2 = 100$$

25) Three points on the circle:

$(-18, -5)$, $(-7, -16)$, and $(4, -5)$

$$(x + 7)^2 + (y + 5)^2 = 121$$

27) $x^2 + y^2 + 14x + 12y + 76 = 0$

Translated 2 right, 4 down

$$(x + 5)^2 + (y + 10)^2 = 9$$

29) $x^2 + y^2 + 14x - 8y + 29 = 0$

Translated 3 right, 4 down

$$(x + 4)^2 + y^2 = 36$$

14) Ends of a diameter: $(-3, 11)$ and $(3, -13)$

$$x^2 + (y + 1)^2 = 153$$

16) Center: $(-11, -14)$

Area: 16π

$$(x + 11)^2 + (y + 14)^2 = 16$$

18) Center: $(15, 14)$

Circumference: $2\pi\sqrt{15}$

$$(x - 15)^2 + (y - 14)^2 = 15$$

20) Center: $(14, 17)$

Point on Circle: $(15, 17)$

$$(x - 14)^2 + (y - 17)^2 = 1$$

22) Center: $(-2, 12)$

Tangent to $x = -5$

$$(x + 2)^2 + (y - 12)^2 = 9$$

24) Center lies in the fourth quadrant

Tangent to $x = 7$, $y = -4$, and $x = 17$

$$(x - 12)^2 + (y + 9)^2 = 25$$

26) Three points on the circle:

$(-7, 6)$, $(9, 6)$, and $(-4, 13)$

$$(x - 1)^2 + \left(y - \frac{47}{7}\right)^2 = \frac{3161}{49}$$

28) $x^2 + y^2 - 10x + 20y + 61 = 0$

Translated 1 left, 2 down

$$(x - 4)^2 + (y + 12)^2 = 64$$

30) $4y + y^2 = -28x - x^2 - 191$

Translated 4 right

$$(x + 10)^2 + (y + 2)^2 = 9$$